



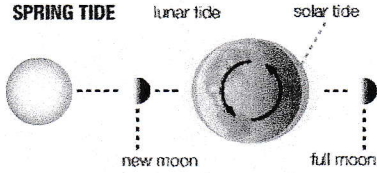
Earth's Motions Assignments

Name _____

Period 1 2 3 4 January, 2015

Score /67 Grade %

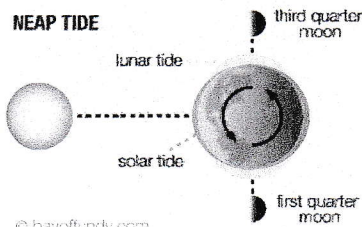
SPRING TIDE



3. What causes the tides? _____

4. Describe what a spring tide is. _____

NEAP TIDE



5. Describe what a neap tide is. _____

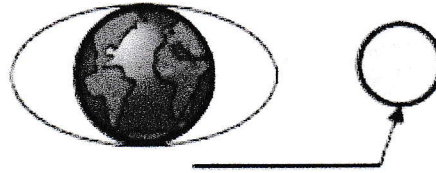

6. What is the position of Earth, the Sun, and the Moon during each tide?

• Spring _____

• Neap _____

1. Spring or Neap Tide? (Circle) How do you know? _____

Color in the tides with a blue pencil. During what moon phase does this type of tide occur?



1. Spring or Neap Tide? (Circle) How do you know? _____

Color in the tides with a blue pencil. During what moon phase does this type of tide occur?

